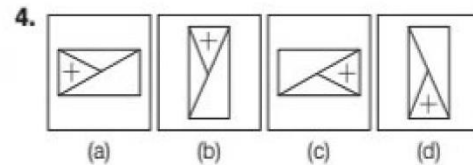
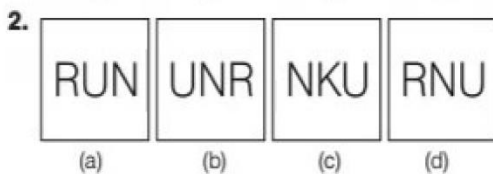
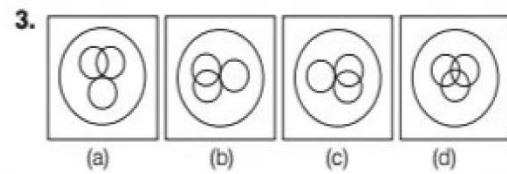
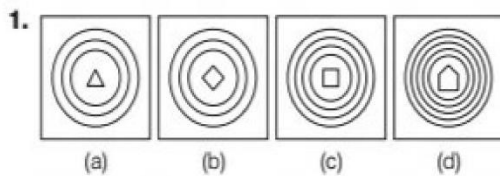


Solved Paper -2019

SECTION I : Mental Ability Test

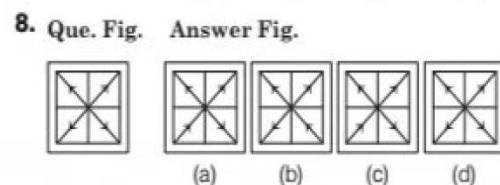
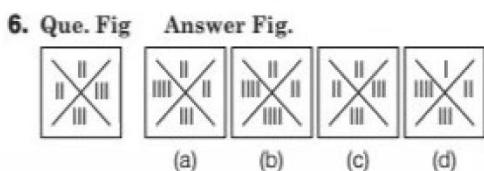
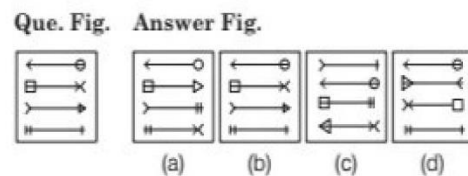
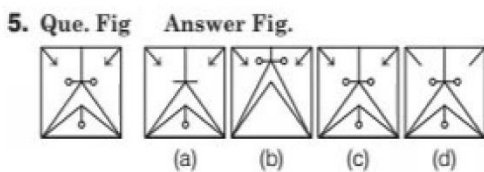
Part I

Directions In Question Nos. 1 to 4, four figures (a), (b), (c) and (d) have been given in each question. Of these four figures, three figures are similar in some way and one figure is different. Select the figure which is different.



Part II

Directions In Question Nos. 5 to 8, a question figure is given on the left side and four answer figures marked (a), (b), (c) and (d) are given in right side. Select the answer figure which is exactly the same as the question figure.

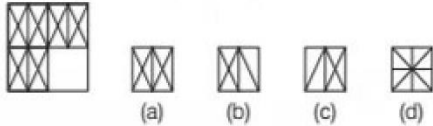


7.


Part III

Directions In Question Nos. 9 to 12, there is a question figure on the left side, a part of which is missing. Observe the answer figures (a), (b), (c) and (d) on the right side and find out the answer figure which without changing the direction, fits in the missing part of the question figure in order to complete the pattern in the question figure.

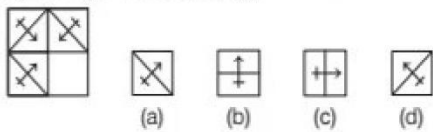
9. Que. Fig. Answer Fig.



11. Que. Fig. Answer Fig.



10. Que. Fig. Answer Fig.



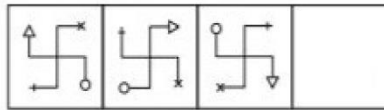
12. Que. Fig. Answer Fig.



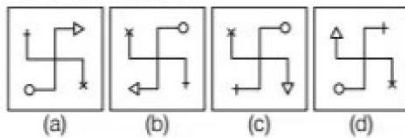
Part IV

Directions In Question Nos. 13 to 16 there are three question figures and the space for the fourth figure is left blank. The question figures are in a series. Find out one figure among the answer given which occupies the blank space for the fourth figure and completes the series.

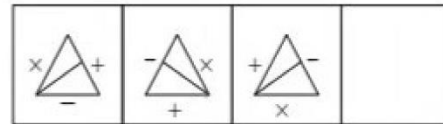
13. Question Figures



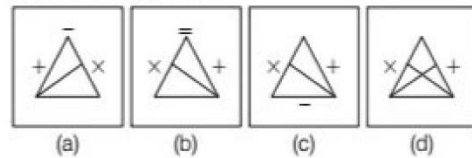
Answer Figures



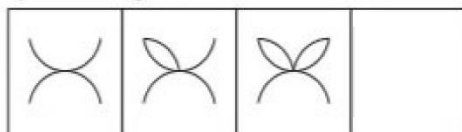
15. Question Figures



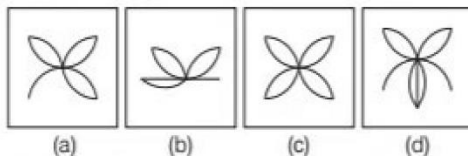
Answer Figures



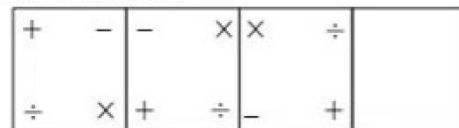
14. Question Figures



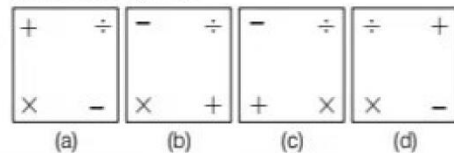
Answer Figures



16. Question Figures



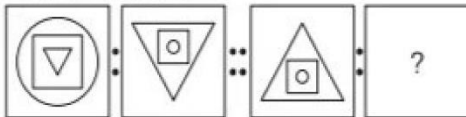
Answer Figures



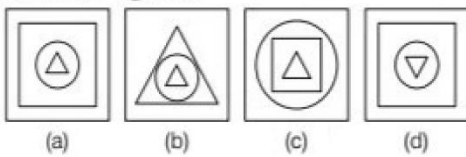
Part V

Directions In Question Nos. 17 to 20, there are two sets of two question figures each. The second set has an interrogation mark (?). There exists a relationship between the first two question figures. Similar relationship should exist between the third and fourth question figures. Select one of the answer figures which replaces the mark of interrogation.

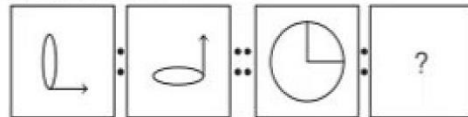
17. Question Figures



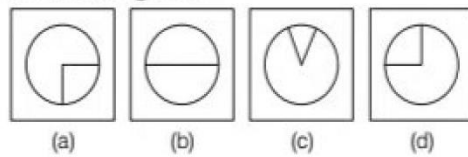
Answer Figures



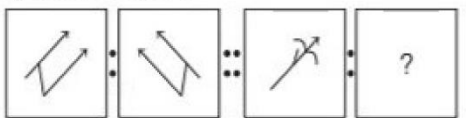
19. Question Figures



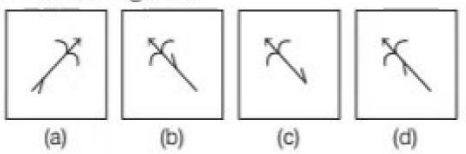
Answer Figures



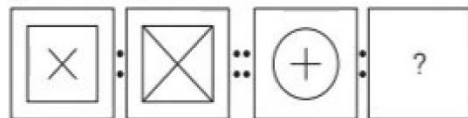
18. Question Figures



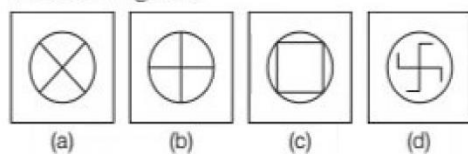
Answer Figures



20. Question Figures



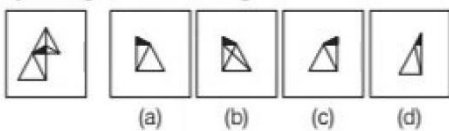
Answer Figures



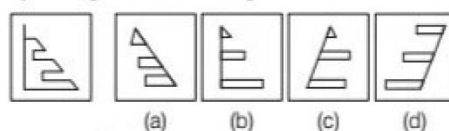
Part VI

Directions In Question Nos. 21-24, one part of a geometrical figure (Triangle, Square, Circle) is on the left side as question figure and the other one is among the four answer figures (a), (b), (c) and (d). Find the figure on the right side that completes the geometrical figure.

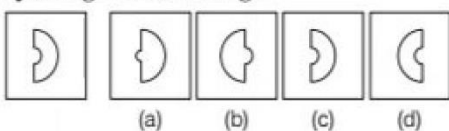
21. Que. Fig. Answer Fig.



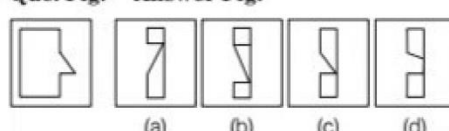
23. Que. Fig. Answer Fig.



22. Que. Fig. Answer Fig.








24. Que. Fig. Answer Fig.








Part VII


Directions In Question Nos. 25-28, there is a question figure is given on left side and four answer figures marked (a), (b), (c) and (d) are given. Select the answer figure which is exactly the mirror image of the question figure when the mirror is held at XY.





25. Que. Fig.  **Answer Fig.**


(a)  (b)  (c)  (d) 





27. Que. Fig.  **Answer Fig.**

(a)  (b)  (c)  (d) 

26. Que. Fig.  **Answer Fig.**

(a)  (b)  (c)  (d) 

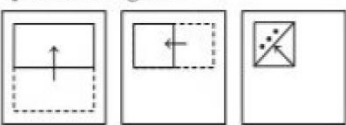
28. Que. Fig.  **Answer Fig.**

(a)  (b)  (c)  (d) 



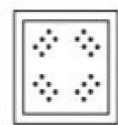
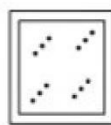
Part VIII

Directions In Question Nos. 29 to 32, a piece of paper is folded and punched as shown in question figures and four answer figures marked (a), (b), (c) and (d) are given. Select the answer figure which indicates how the paper will appear when opened (unfolded).

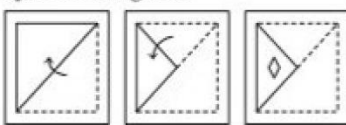
29. Question Figures




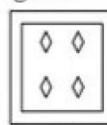
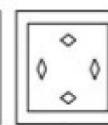
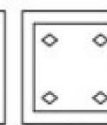
Answer Figures

(a)  (b)  (c)  (d) 

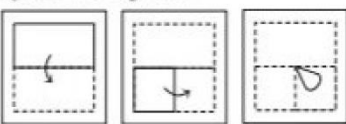
31. Question Figures



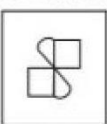


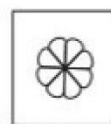
Answer Figures

(a)  (b)  (c)  (d) 

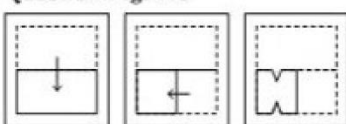
30. Question Figures



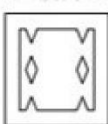
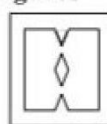
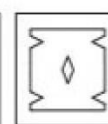
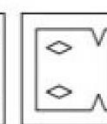
Answer Figures

(a)  (b)  (c)  (d) 

32. Question Figures



Answer Figures

(a)  (b)  (c)  (d) 

44. If a man travels at a speed of 30 km/h, he reaches his destination 10 min late and if he travels at a speed of 42 km/h, he reaches his destination 10min early. The distance travelled is
(a) 36 km (b) 35 km (c) 40 km (d) 42 km
45. A passenger train, running at a speed of 80 km/h leaves a railway station 6h after a goods train leaves and overtakes it in 4 h. What is the speed of the goods train?
(a) 32 km/h (b) 48 km/h (c) 60 km/h (d) 50 km/h
46. What sum will amount to ₹ 6600 in 4 yrs at 8% per annum simple interest?
(a) ₹ 6000 (b) ₹ 5000 (c) ₹ 4000 (d) ₹ 6200
47. 5045 grams is equal to
(a) 50 kg, 45 gm (b) 5 kg, 45 gm
(c) 5 kg, 450 gm (d) 50 kg, 450 gm
48. How many rectangular slabs of 10 cm × 8 cm are required to cover the floor of a hall of 12 m × 10 m?
(a) 12000 (b) 15000 (c) 10000 (d) 18000
49. What is the sum of the place value of 5 in the number 584356?
(a) 10 (b) 50050 (c) 5050 (d) 500050
50. Two solid cubes of side 10 cm each are joined end to end. What is the volume of the resulting cuboid?
(a) 500 cm³ (b) 2000 cm³
(c) 1000 cm³ (d) 10000 cm³
51. 150% is equal to
(a) 1.5 (b) 5.1 (c) 0.15 (d) 15.0
52. A fruit seller buys lemons at 2 for a rupee and sells them at 5 for three rupees. What is his profit per cent?
(a) 8% (b) 10% (c) 15% (d) 20%
53. Which of the following numbers is divisible by 3, 4, 5 and 6?
(a) 36 (b) 60 (c) 80 (d) 90
54. There are 500 eggs in a box. $\frac{3}{25}$ got broken, $\frac{4}{5}$ of the remaining eggs were sold. The number of eggs left is
(a) 80 (b) 88 (c) 40 (d) 36
55. 5 minutes past 3, in the afternoon, is written as
(a) 5 : 30 am (b) 5 : 30 pm
(c) 3 : 50 pm (d) 3 : 05 pm
56. The difference between the greatest and the smallest 5-digit numbers, formed by the digits 0, 3, 6, 7 and 9 without repetition, is
(a) 93951 (b) 67061
(c) 66951 (d) 60840
57. An article is sold for ₹ 500 and hence a loss is incurred. Had the article been sold for ₹ 700, the shopkeeper would have gained three times the former loss. What is the cost price of the article?
(a) ₹ 525 (b) ₹ 550 (c) ₹ 600 (d) ₹ 650
58. When -1 is multiplied by itself 100 times, the product is
(a) 1 (b) -1 (c) 100 (d) -100
59. Simplification of $2.75 - 1.25 + 4.75 - 3.80$ in fractional form is
(a) $2\frac{9}{20}$ (b) $2\frac{9}{10}$ (c) $1\frac{9}{10}$ (d) $5\frac{9}{20}$
60. The length of a rectangular plot of land is twice its breadth. A square swimming pool of side 8 m, occupies one-eighth part of the plot. The length of the plot is
(a) 64 m (b) 32 m (c) 16 m (d) 12 m

SECTION III : Language Test

Directions (Q. Nos. 61-80) *There are four passages in this Section. Each passage is followed by five questions. Read each passage carefully and answer the questions that follow. For each question four probable answers as (a), (b), (c) and (d) are given. Only one out of these is correct.*

Passage I

Chewing gum was discovered a thousand years ago by the Mayans in the Mexican jungles. They found a liquid leaking from a sapodilla tree. As it oozed out, it thickened into something that they called chicle which was chewable and tasty. Today, workers called chicleros still collect chicle. The chicle is boiled to remove the water. It is then made into slabs about 30 pounds each or 14 kilograms each. These slabs are sent to gum factories. There it is mixed with several ingredients to sweeten, soften, flavour and colour the gum.

61. discovered chewing gum.
(a) The Mayans (b) Sapodillas
(c) Chicleros (d) Gum factories
62. are the workers who collect chicle.
(a) Sapodillas (b) The Mayans
(c) Chicleros (d) Gummers
63. Slabs of chicle are sent to
(a) recycling centers (b) gum factories
(c) the Mexican jungles (d) candy stores
64. Several ingredients are added to chicle to do all of the following except to it.
(a) soften (b) flavour
(c) thicken (d) sweeten
65. A suitable title for the passage will be
(a) The Gum
(b) Chiclero
(c) The Story of Chiclero
(d) The Story of Chewing Gum

Passage 2

India is a land of pilgrims and pilgrimages. These holy places, whether in the hills or in the plains, are **generally** situated on river banks or by the sea. It is not only the religious people who visit these places of pilgrimages, but also travellers and sight-seers from all over India and abroad. Wherever two or more rivers meet, pilgrims come to bathe and worship because that place is supposed to be holy. One such place is Haridwar which is situated on the bank of river Ganga.

66. Holy places are visited by religious people, sight-seers as well as
(a) children
(b) travellers
(c) traders
(d) voyagers
67. Which one of the following is a synonym of the word 'generally'?
(a) usually
(b) publicly
(c) occasionally
(d) eventually
68. The place is considered 'holy' where two or more rivers meet.
Here the antonym of the word 'holy' is
(a) godly (b) religious
(c) cursed (d) pious
69. People come to bathe and worship in the Ganga as its water is
(a) holy (b) clear and clean
(c) cool (d) healthy
70. People go on a pilgrimage because they are
(a) curious (b) religious
(c) explorers (d) old

Passage 3

It was Ajit's birthday. All his friends and relatives had gathered. He received many gifts. There were books, toys and clothes. Ajit's aunt gave him a surprise gift—a rose sapling. Ajit liked his aunt's gift the best and at once ran to the garden and planted the sapling. Ajit watered the plant everyday. As soon as he woke up in the morning, he would rush to see how much the plant had grown. One day he saw two little rose buds peeping out. He kept watching the buds bloom into beautiful yellow roses. He was happy and thrilled. With his mother's help, he plucked the flowers. He gifted the first two roses to his mother and sister. Ajit decided to plant more saplings in his garden.

71. Ajit's best birthday gift was a
(a) race car
(b) shirt
(c) rose sapling
(d) book
72. As soon as Ajit woke up he
(a) started studying
(b) rushed to see the sapling
(c) had a bath
(d) went to school
73. How many rose buds appeared first?
(a) one (b) four
(c) two (d) many
74. Ajit gifted the first two roses to
(a) his friends (b) his aunt
(c) his mother and sister (d) his mother and aunt
75. The word 'thrilled' means
(a) sad (b) excited
(c) afraid (d) surprised

Passage 4

The neem tree is known as a village pharmacy due to the medicinal benefits of its seeds, bark and leaves. It is called *arista* in Sanskrit which means perfect, imperishable and complete. Neem oil plays an important role in pest control and can also be used as a replacement for mosquito repellent. Neem seed cakes are used as fertilizer. A paste of neem leaves is used to treat chickenpox. Neem twigs commonly referred to as 'datun' are used as toothbrushes in villages. The bark and roots are also used, in powdered form, to control fleas and ticks on pets.

- 76.** A pharmacy is
(a) farm land (b) a medical store
(c) a playground (d) a farm house
- 77.** The part of the neem tree that is useful to the farmers is
(a) seeds (b) bark (c) twigs (d) leaves
- 78.** Which one of the following is not a synonym of 'perfect'?
(a) faultless (b) flawless
(c) seamless (d) blemished
- 79.** The word 'pest' in the passage means
(a) an insect that destroys crops
(b) an angry person
(c) dirty water
(d) pollution
- 80.** Neem ... are used as toothbrushes in villages.
(a) roots
(b) leaves
(c) twigs
(d) seed cakes